





Sample Cards Red

Computation and
Number Sense

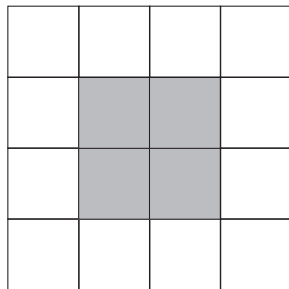
About what fraction of each picture is shaded?



A



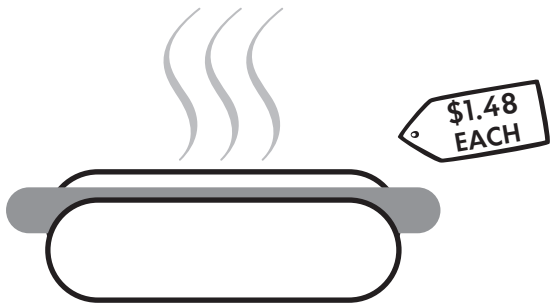
B



C



Pretend you wanted to buy **four** hot dogs.



- Will **\$5** cover the total cost? Write how you know.
- Calculate the exact cost in your head. Write about the strategy you used.



**NUMBER
JUGGLERS**